


Reading the Time

Name: _____ Date: _____




Write the time that each clock is showing.

(1)




The time is _____.

(2)




The time is _____.

(3)



The time is _____.

(4)




The time is _____.

(5)




The time is _____.

(6)




The time is _____.

(7)



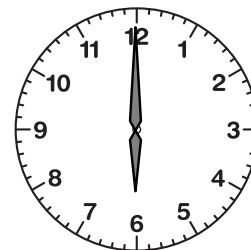
The time is _____.

(8)



The time is _____.

(9)



The time is _____.


Reading the Time

ANSWER KEY



Write the time that each clock is showing.

(1)




The time is 2:00.

(2)




The time is 8:00.

(3)



The time is 7:00.

(4)




The time is 4:00.

(5)




The time is 11:00.

(6)




The time is 5:00.

(7)



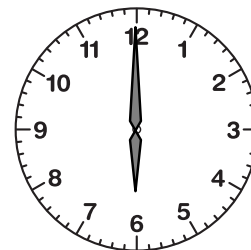
The time is 10:00.

(8)



The time is 3:00.

(9)



The time is 6:00.